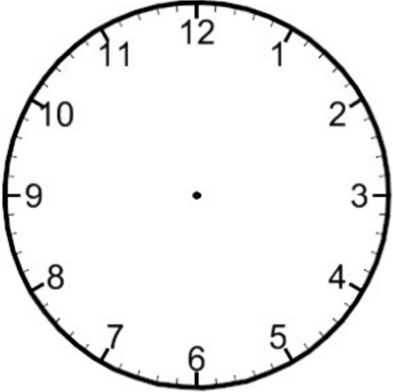
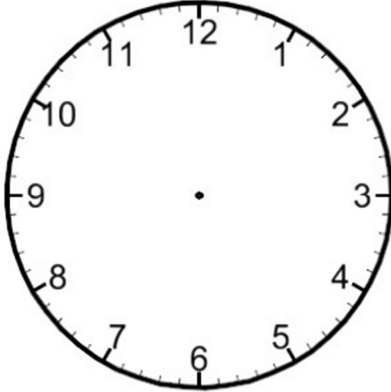
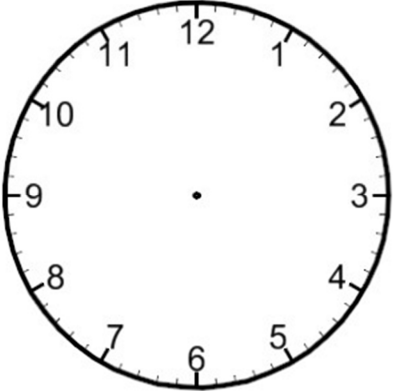
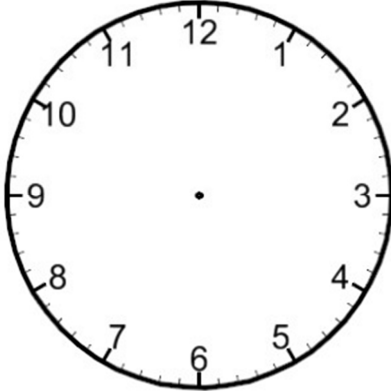


Homework for the Week of Jan. 14 - 17

1. Read **each night** for at least **10 minutes** and log your reading on a log sheet provided.

2. In Math, we are learning about telling time to the nearest five minutes. Use the clocks below and draw the hands to show the time. (Make sure the minute hand is longer than the hour hand and both hands are accurately placed on the clock.)

 <p>3:05</p>	 <p>7:40</p>
 <p>1:25</p>	 <p>11:50</p>

3. Solve the following problem.

Ethan likes to practise his skating skills after school.
He practises his skating for 30 minutes each day.
If he practised for a total of 4 hours, how many days did he practise?
Justify your thinking.

